

QUARTERLY EXAMINATION 2025 - 26

**MATHS**  
(RAINBOW SERIES)

**Max. Marks: 100**

**Std - LKG**

**Time: 2 Hrs**

Name of the Student:	Written	Oral	Total
_____			
Name of the School:			
_____			



**I. Tick  the correct answer:**

**5 x 2 = 10**

1. Big bird



2. Small vegetable




3. Tall candle



4. Short man




5. Short hair



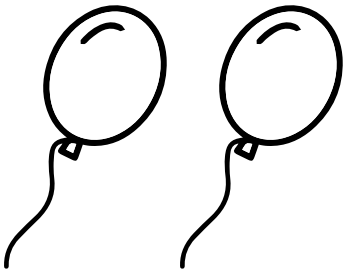
**II. Write the numbers from 1 to 10:**

**$10 \times 2 = 20$**



**III. Match the following:**


**$5 \times 2 = 10$**




5



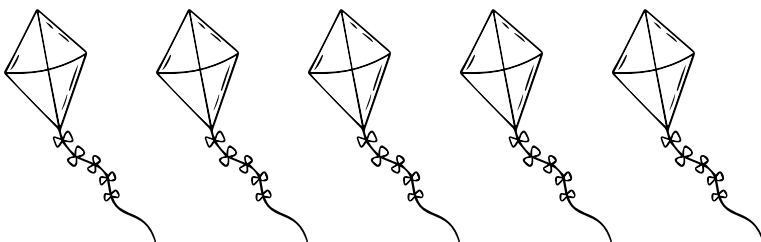
1



2




6




4

**IV. Count and circle the numbers:**

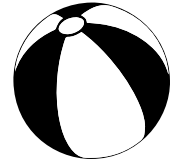
**5 x 2 = 10**




1	2	3
---	---	---




5	8	3
---	---	---



2	3	1
---	---	---




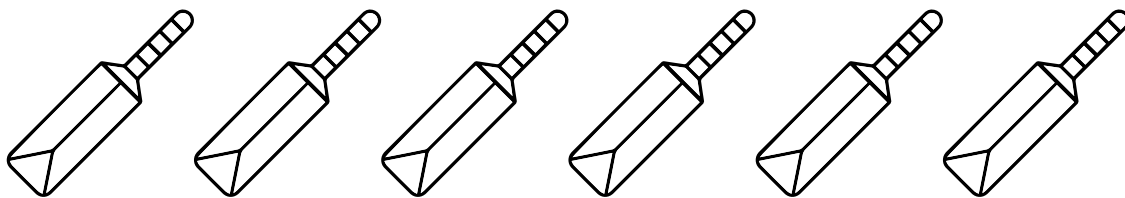


4	3	2
---	---	---



8	7	5
---	---	---

**V. Count and write the number in the box:**

**5 x 2 = 10**



## **VI. Oral:**

**40**

1. Tell the numbers from 1 to 10.
2. Count the objects and tell the numbers.
3. Tell big, small & tall, short